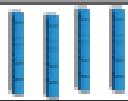





Lesson 3: Can I add tens?

1. $23 + 40 =$

Tens	Ones
	
	

$56 + 30 =$

Tens	Ones
	
	

2.



They are given a new box of 10 each day for a week.

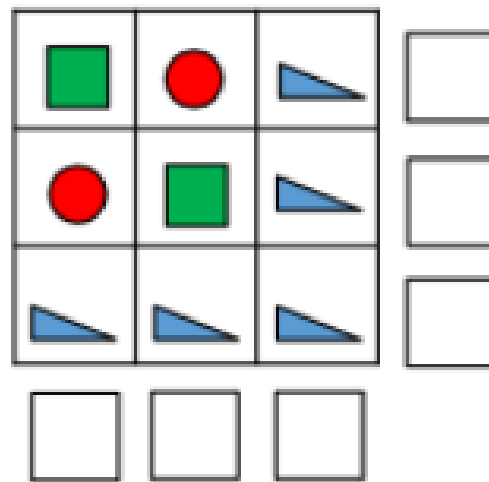
How many crayons do they have at the end of the week?

3. Continue the number track by adding 20 each time.

23				
----	--	--	--	--

Deeper thinking

1.



Circles represent 20
Triangles represent 10
Squares represent 50

What is the value of each row and column?