

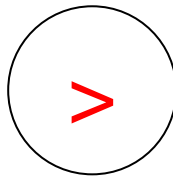
Can you compare the numbers using the more than, less than and equals symbols?

< > =

1	2	3	4	5	6	7	8	9	10
11	12	13	14	15	16	17	18	19	20
21	22	23	24	25	26	27	28	29	30
31	32	33	34	35	36	37	38	39	40
41	42	43	44	45	46	47	48	49	50

Example:


15



9

15 is more than 9.


11



32

11 is _____ than _____.


23



28

23 is _____ than _____.


35



35

35 is _____ to _____.

18



41

18 is _____ than _____.