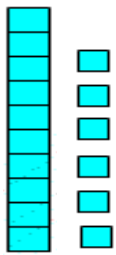




26.03.20

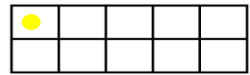
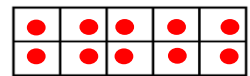
Can you compare these numbers using the more than, less than or equals to signs? Remember Mr Chomp!

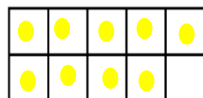
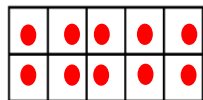


16



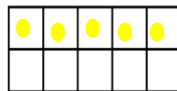
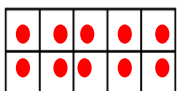
19







17



20



11



Remember Mr Chomp is a very greedy crocodile and always eats (faces) the bigger number!

E.g. $15 > 3$

$5 < 20$