


POUNDS AND PENCE



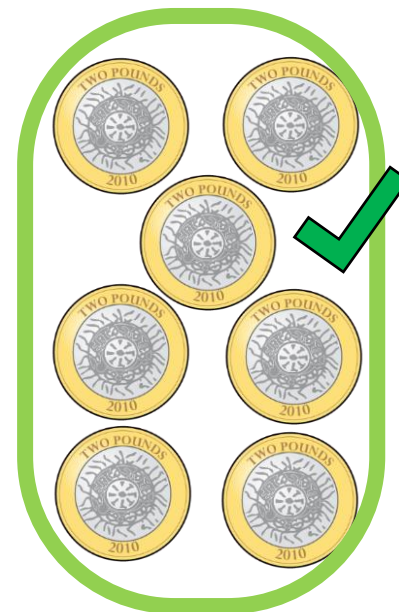
Count the money.



Which of these represent £14?



Which of these represent £14?



Who has the most money?

Who has the least?



Jack




Amir



Mo



Whitney is making 50p using only silver coins.




There are lots of different ways to do this.

Have a think



How much does Whitney have?





How much does Rosie have?



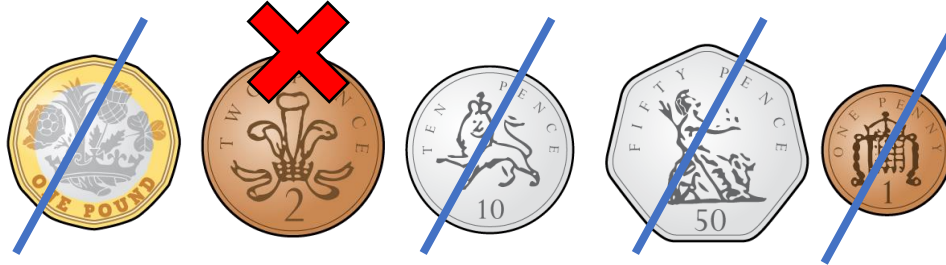
Alex has these coins.

Have a think



She drops one of her coins.
How much could she have left?

Alex has these coins.



$$£1 + 50p + 10p + 1p = £1 \text{ and } 61p$$

She drops one of her coins.
How much could she have left?

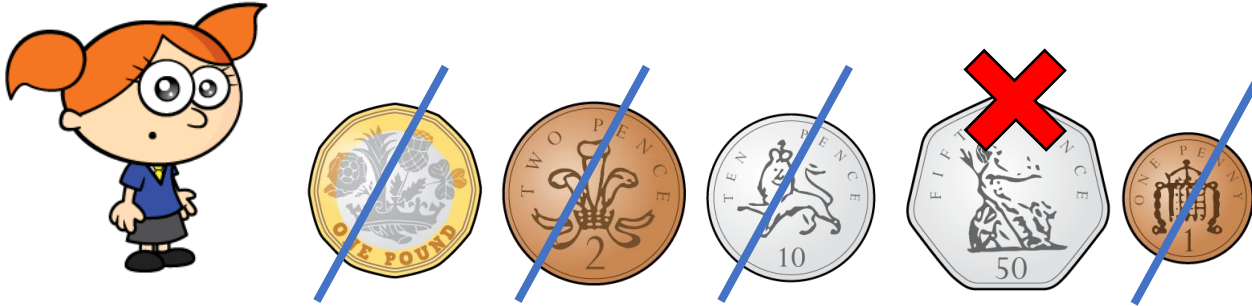
Alex has these coins.



$$£1 + 50p + 2p + 1p = £1 \text{ and } 53p$$

She drops one of her coins.
How much could she have left?


Alex has these coins.



$$£1 + 10p + 2p + 1p = £1 \text{ and } 13p$$

She drops one of her coins.
How much could she have left?

Alex has these coins.



$$£1 + 50p + 10p + 2p = £1 \text{ and } 62p$$

She drops one of her coins.
How much could she have left?