

ADD MONEY



1) How much money is there?



2) What is £1 more than £5 and 42p?

3) What is £2 more than £5 and 42p?

4) True or false?

$$19 + 6 = 20 + 5$$

Complete the part-whole model.


£4 and
73p

$$£3 + £1 = £4$$

$$50p + 23p = 73p$$



Complete the part-whole model.



$$£2 + £5 = £7$$

$$45p + 5p = 50p$$

Have a think



Whitney buys some apples, pears and bananas.





How much does Whitney spend in total?

$$£1 + £1 + £1 = £3$$

$$25p + 30p + 40p = 95p$$

Whitney spends?

Jack is selling some things he no longer needs.



The ball and the panda.

How much does Amir spend?






How much does Ron spend?



Ron buys the train and the bucket and spade.



Is there an easier way?

I will find the total cost.

