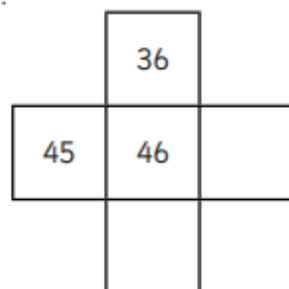
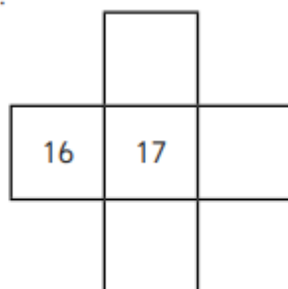


1. Can you fill in the missing numbers in these pieces snipped from number squares?
Don't forget you can have number squares that are bigger than 0-100

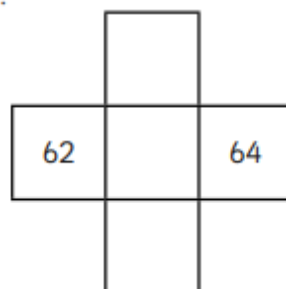
1.



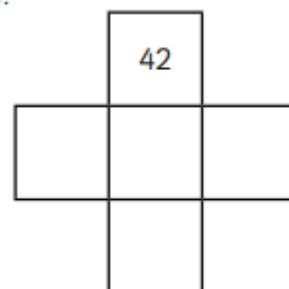
2.



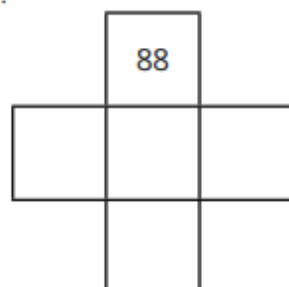
3.



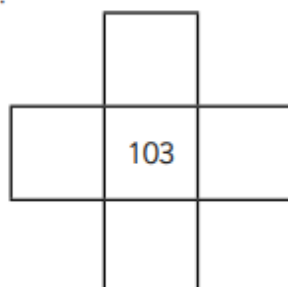
4.



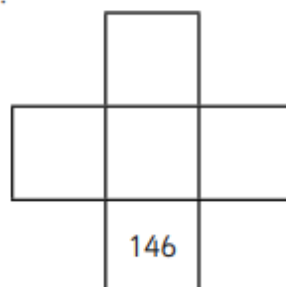
5.



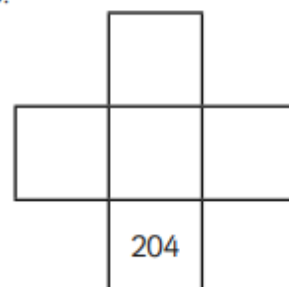
6.



7.



8.



2. Look at the amounts these children have saved. How much would they have if they spent £10 or if they saved £10 more?

1.

- £10	£37	+ £10

2.

	£13	

3.

	£48	

4.

	£93	

5.

	£109	

6.

	£131	

7.

	£10	

8.

	£198	