




Lesson 2: Can I find 10 more and 10 less?

1. Continue the number tracks below.

10	20	30			
----	----	----	--	--	--

			35	45	55			
--	--	--	----	----	----	--	--	--

2. Complete the missing boxes.

10 less		10 more
		
2	12	22
		
	37	

Deeper thinking

- 1 Amy added and subtracted tens to 2 digit numbers...

$$45 + 30 = 75$$

$$98 - 50 = 93$$

$$72 + 20 = 52$$

She made some mistakes, tell me which ones she got wrong and why then show me the correct answer