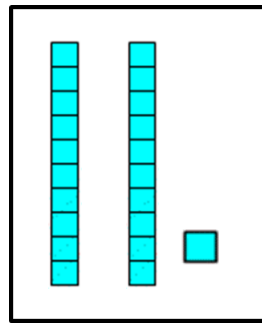

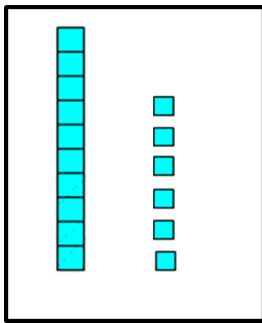


23.03.20

How many tens and ones are there?



Can you represent these numbers using tens and ones?

Write the answers in your green books.

11

16

20

5

31

19

27

23

41

48

35

52