



Good Morning years 3 and 4.

Today we are learning about Money. What can you remember?


TASK 1:

Can you name all these below? (the coins are larger so you can see them)





TASK 2

Complete these. TOP TIP! Use your times tables to help you

 Count the money.



 Complete the bar models.



 Match the money to the correct total.



£25



£60



£10

Which is the odd one out? Explain why.

7

©White Rose Math

 Fill in the gaps to make the statements correct.

- £10 + £5 + 50 p = £____ and ____p
- £20 + £2 + 10 p + 10 p + 2 p = £____ and ____p
- £5 + £__ + 50 p + 20 p + 20 p + 1 p = £10 and ____p

9

©White Rose Math

Challenge!

These Piggy banks are empty. Can you fill them with different coins or notes and find the totals? You can draw the coins and notes or just write the amounts.

