

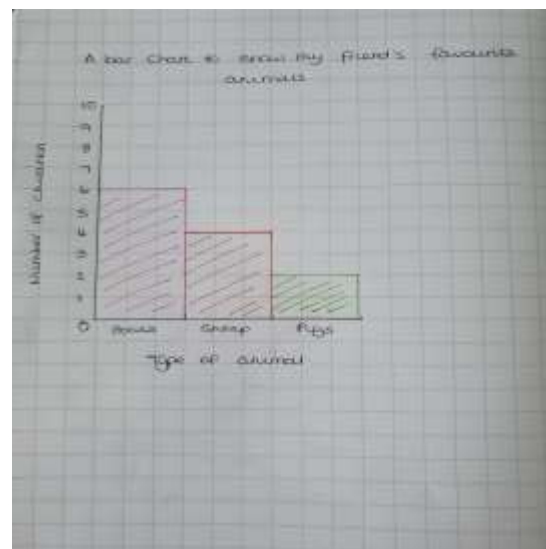
06.05.20

Answers

Your bar charts may differ to mine. These are just example of what they may look like.

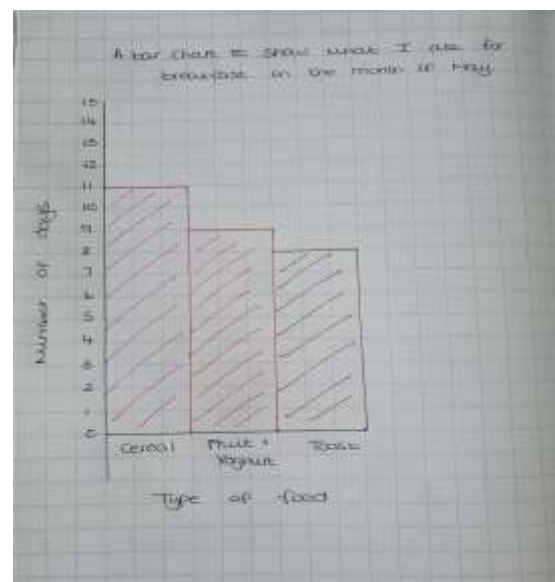
Goats	
Sheep	
Pigs	

Appropriate scale - 10




Cereal	
Fruit & Yoghurt	
Toast	

Appropriate scale - 15



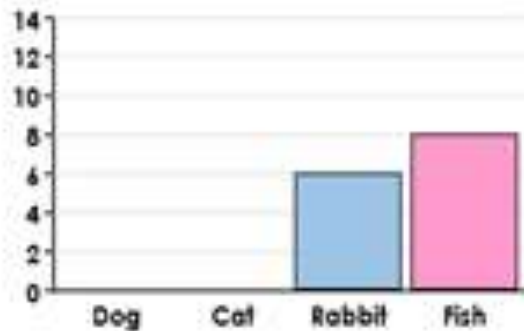
Black	
Silver	
Red	

Appropriate scale - 20

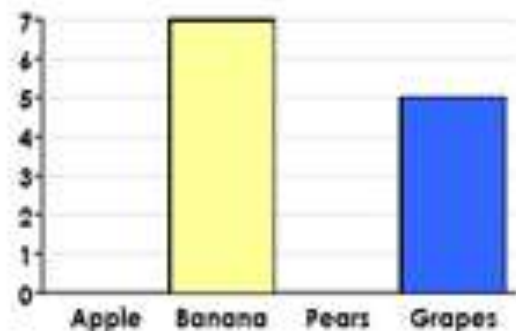


07.05.20

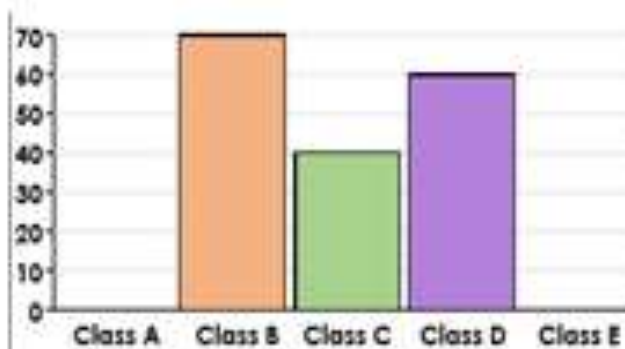
I can interpret bar charts.



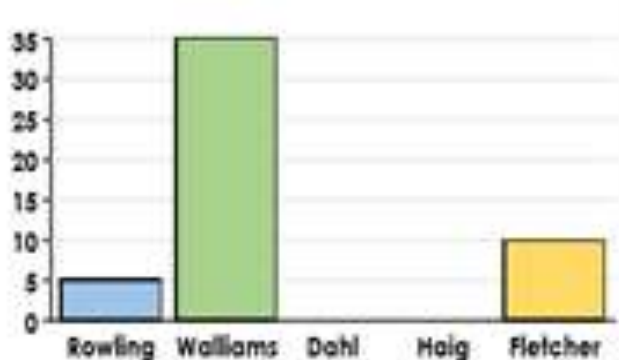
Fewer children have dogs than cats, but more children have dogs than fish. Complete the bar chart showing how many children could have dogs or cats.



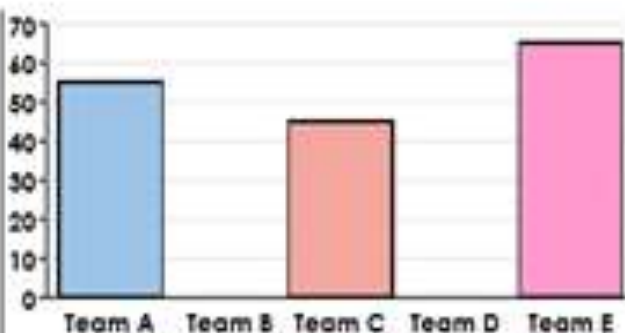
More children like apples than pears, but fewer like pears than grapes. Complete the bar chart showing how many children could like apples and pears.



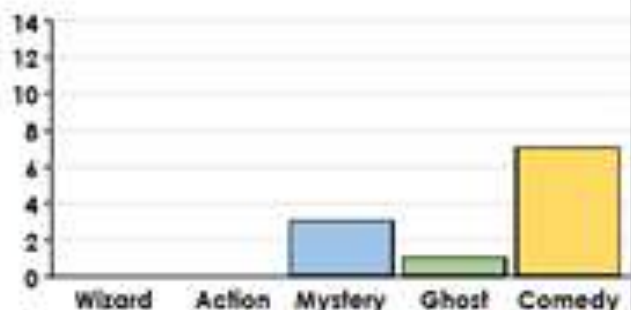
Class A have fewer points than Class E, but Class E have more than Class C. Complete the bar chart showing how many points Classes A and E could have.



More children like Dahl than Haig, and fewer like Haig than Walliams. Complete the bar chart showing how many children could like Dahl and Haig.



Team B have more points than Team D, and Team D have fewer than Team C. Complete the bar chart to show how many points Teams B and D could have.



Fewer children like action than wizards, but more like action than comedy. Complete the bar chart to show how many children could like wizards and action.