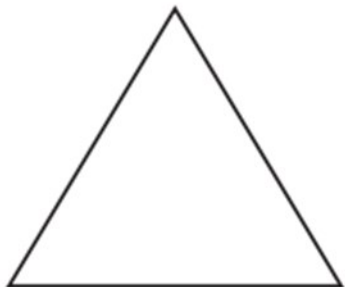


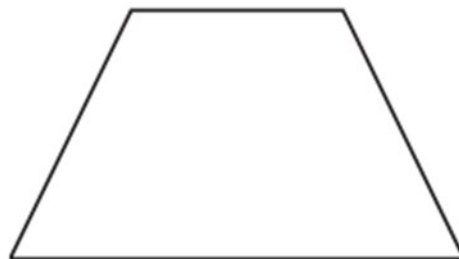
11.05.20

Can you name these 3D shapes? Have a look at the powerpoint if you need any help.



Number of sides _____

Name _____



Number of sides _____

Name _____



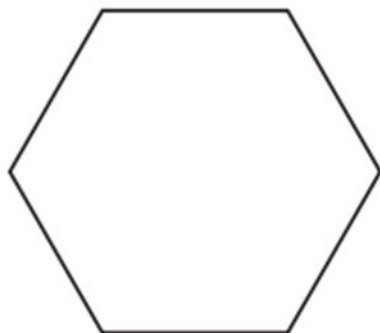
Number of sides _____

Name _____



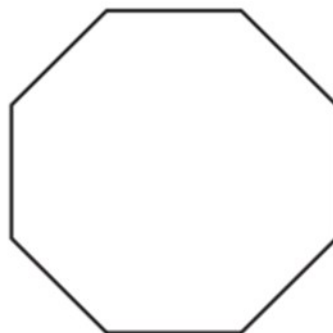
Number of sides _____

Name _____



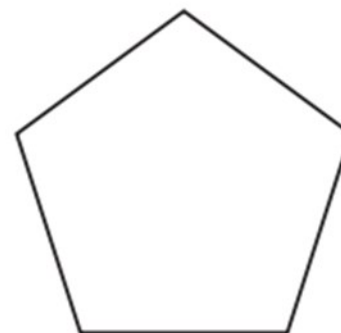
Number of sides _____

Name _____



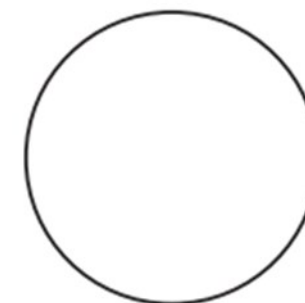
Number of sides _____

Name _____



Number of sides _____

Name _____



Number of sides _____

Name _____